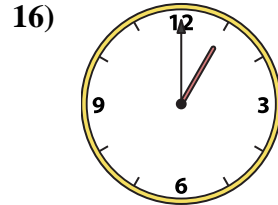
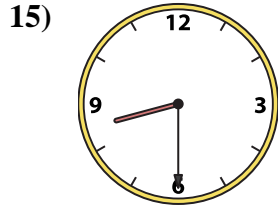
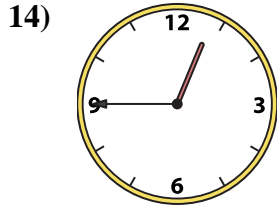
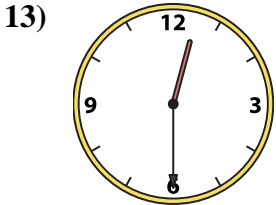
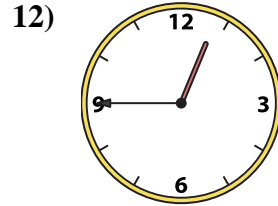
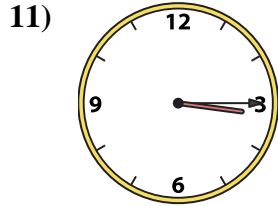
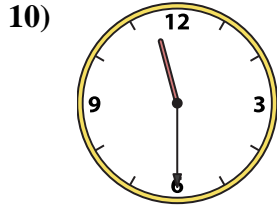

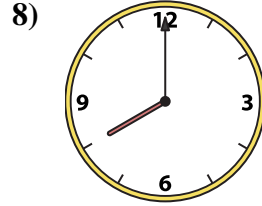
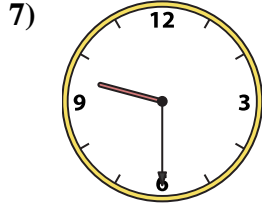


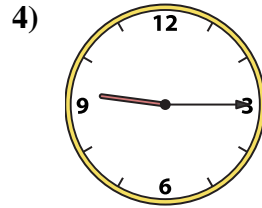
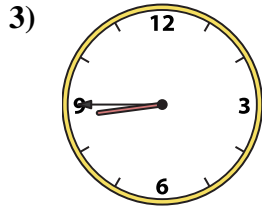
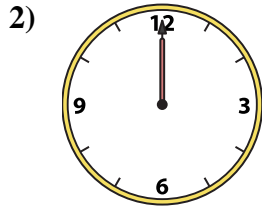
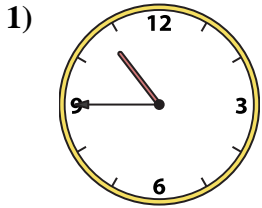




Match the analog clock to the digital clock.

**Answers**



A. 3:15

B. 12:45

C. 9:15

D. 1:00

E. 8:45

F. 12:00

G. 4:00

H. 12:30

I. 6:30

J. 10:45

K. 12:45

L. 8:00

M. 8:30

N. 9:30

O. 11:30

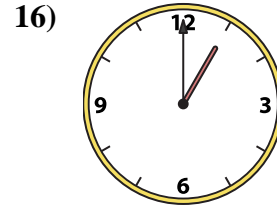
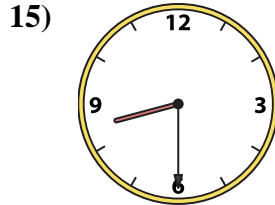
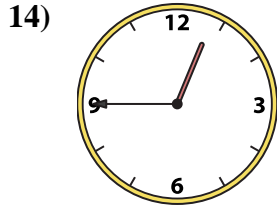
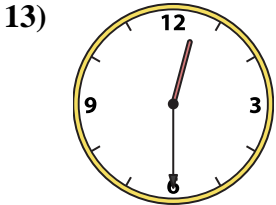
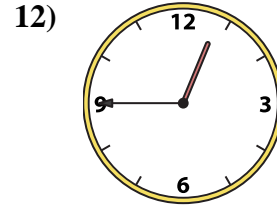
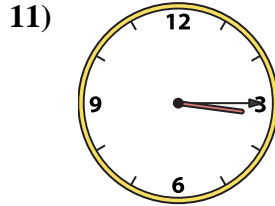
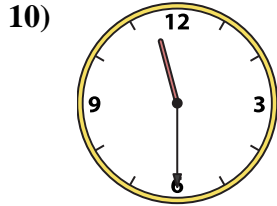

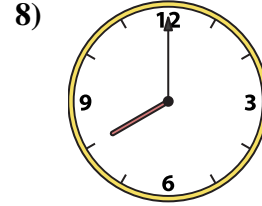
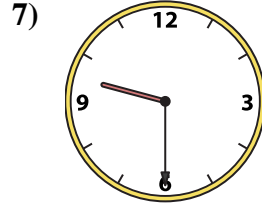


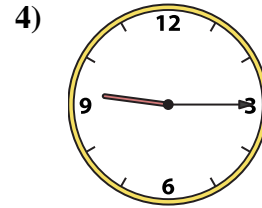
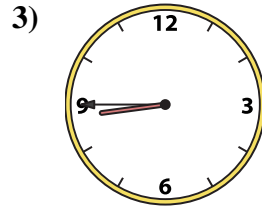
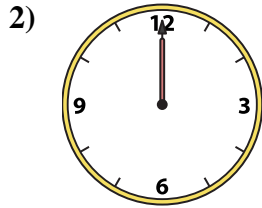
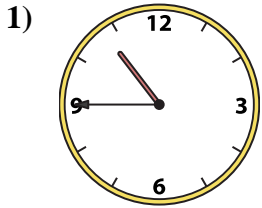
P. 11:15

1. \_\_\_\_\_
2. \_\_\_\_\_
3. \_\_\_\_\_
4. \_\_\_\_\_
5. \_\_\_\_\_
6. \_\_\_\_\_
7. \_\_\_\_\_
8. \_\_\_\_\_
9. \_\_\_\_\_
10. \_\_\_\_\_
11. \_\_\_\_\_
12. \_\_\_\_\_
13. \_\_\_\_\_
14. \_\_\_\_\_
15. \_\_\_\_\_
16. \_\_\_\_\_



Match the analog clock to the digital clock.

**Answers**



A. **3:15**

B. **12:45**

C. **9:15**

D. **1:00**

E. **8:45**

F. **12:00**

G. **4:00**

H. **12:30**

I. **6:30**

J. **10:45**

K. **12:45**

L. **8:00**

M. **8:30**

N. **9:30**

O. **11:30**

P. **11:15**

1. **J**

2. **F**

3. **E**

4. **C**

5. **I**

6. **G**

7. **N**

8. **L**

9. **P**

10. **O**

11. **A**

12. **B**

13. **H**

14. **K**

15. **M**

16. **D**